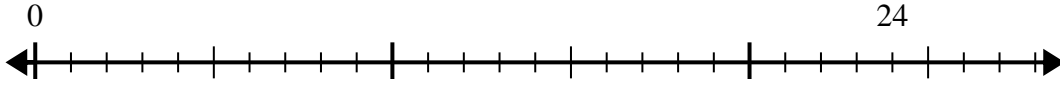


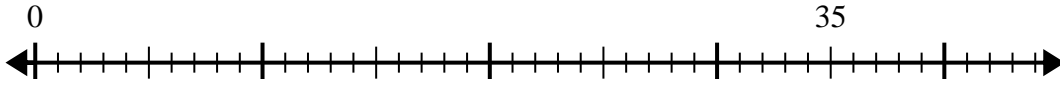


Use the number line to solve the division problem.

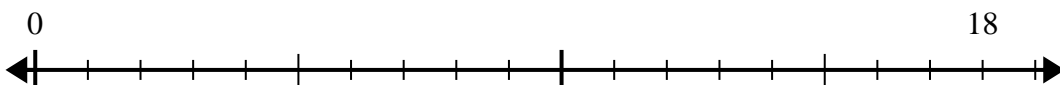
1) $24 \div 6 =$
0



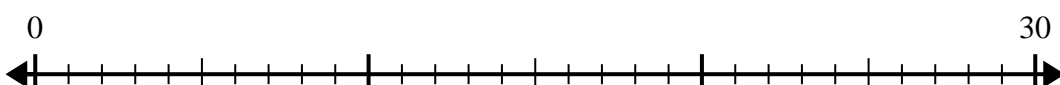
2) $35 \div 7 =$
0



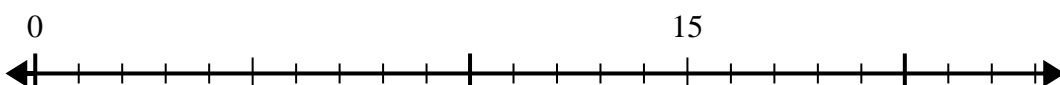
3) $18 \div 6 =$
0



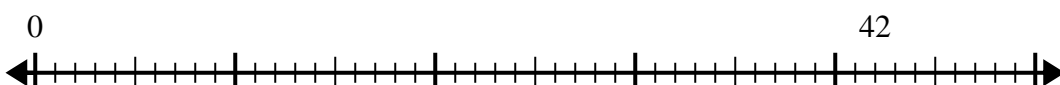
4) $30 \div 6 =$
0



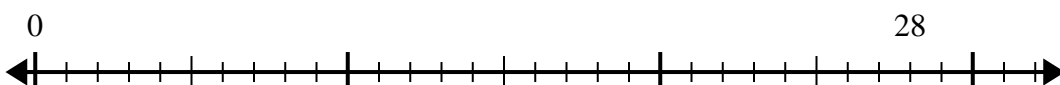
5) $15 \div 5 =$
0



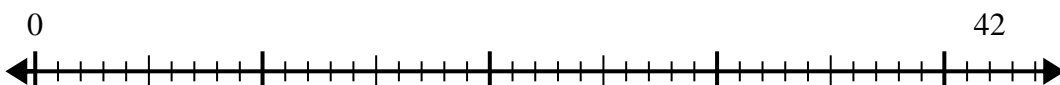
6) $42 \div 6 =$
0



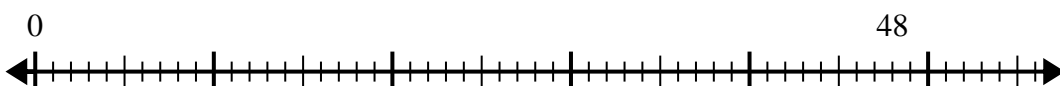
7) $28 \div 7 =$
0



8) $42 \div 7 =$
0



9) $48 \div 8 =$
0



10) $48 \div 6 =$
0



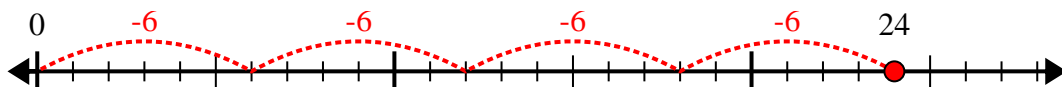
Answers

- 1. _____
- 2. _____
- 3. _____
- 4. _____
- 5. _____
- 6. _____
- 7. _____
- 8. _____
- 9. _____
- 10. _____

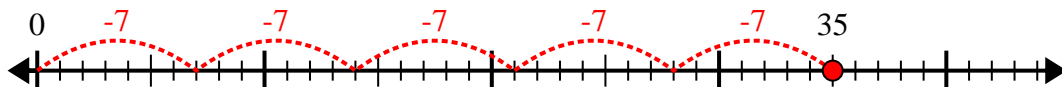


Use the number line to solve the division problem.

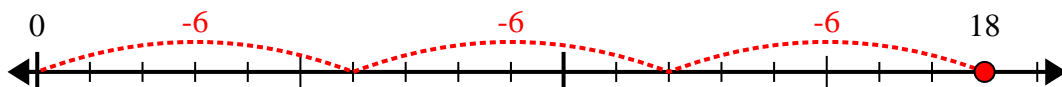
1) $24 \div 6 =$



2) $35 \div 7 =$



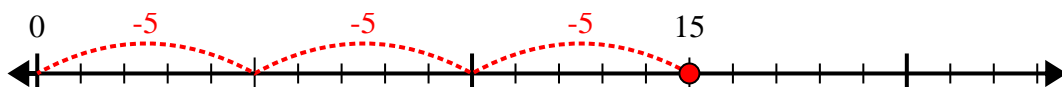
3) $18 \div 6 =$



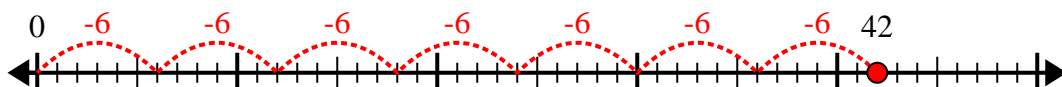
4) $30 \div 6 =$



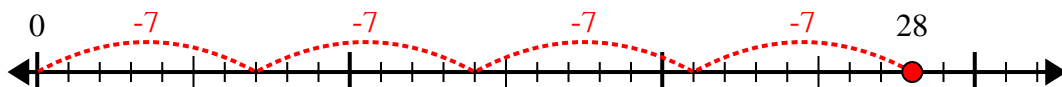
5) $15 \div 5 =$



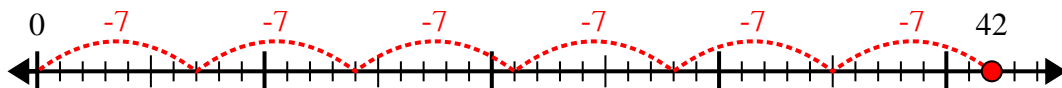
6) $42 \div 6 =$



7) $28 \div 7 =$



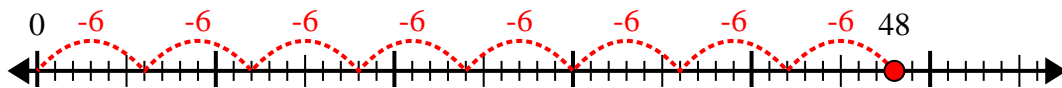
8) $42 \div 7 =$



9) $48 \div 8 =$



10) $48 \div 6 =$



Answers

1. 4

2. 5

3. 3

4. 5

5. 3

6. 7

7. 4

8. 6

9. 6

10. 8